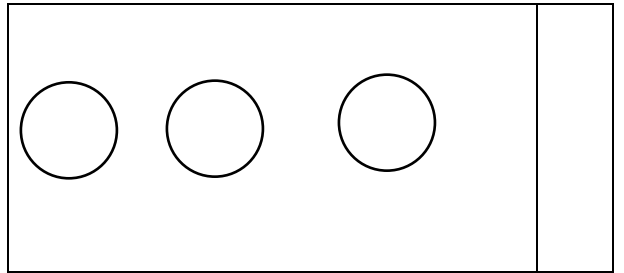
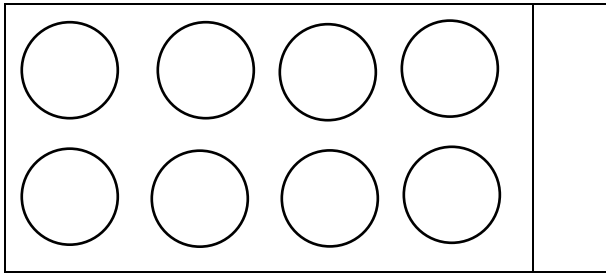
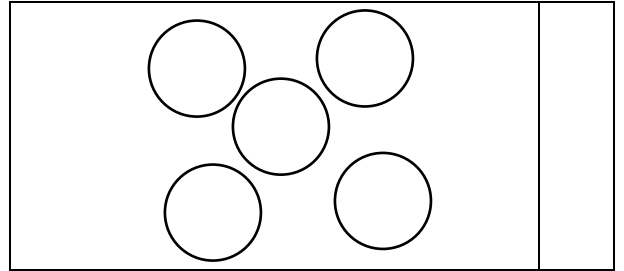
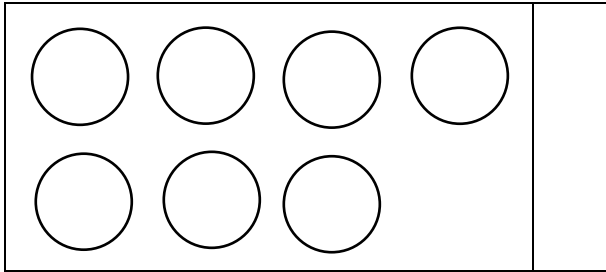


Maandag, 4 Mei 2020

Taak 1 - Geniet dit!

1. Kom ons tel die sirkels en skryf die getal.



2. Pas die getalnaam by die regte getal.

vier

5

nege

1

een

3

drie

9

vyf

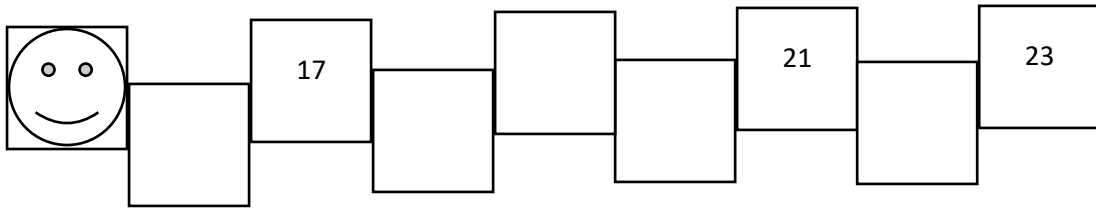
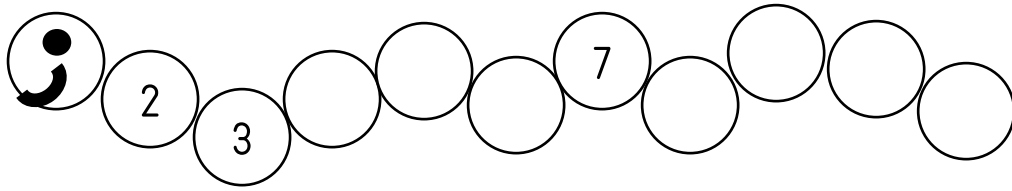
4

3. Skryf die getalnaam langs die getal.

a. 10 _____

b. 7 _____

4. Kom ons tel nou aan.



4.1 15, 20, 25, _____, _____, _____, _____

4.2 16, 18, 20, _____, _____, _____, _____

4.3 30, 40, _____, _____, _____, _____

Kom ons teken.

Teken 5 balle	Teken 9 blomme
Teken 3 appels	Teken 6 blokkies